
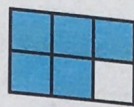


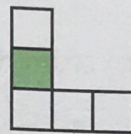
4. Indique la fraction coloriée.




≡



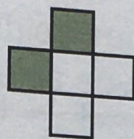
≡



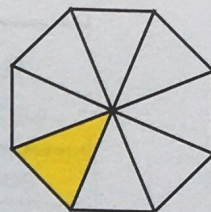
≡



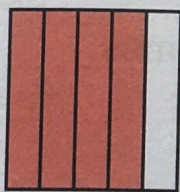
≡



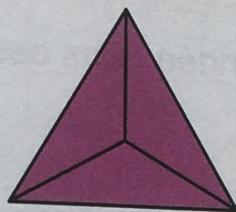
≡



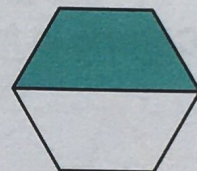
≡




≡




≡



≡



≡



≡



≡



Je définis

Ce nombre m'indique que

Il s'appelle

Ce nombre m'indique que

Il s'appelle

$$\frac{3}{4}$$