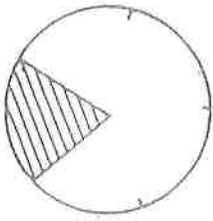
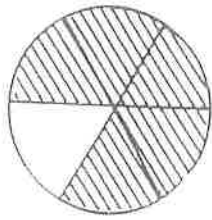


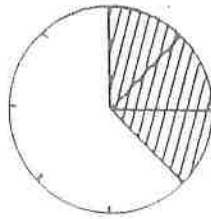
# Les Fractions.



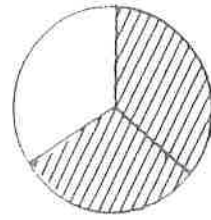
$$\frac{1}{5}$$



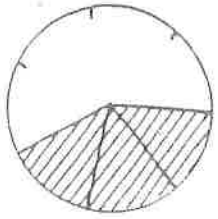
$$\frac{5}{6}$$



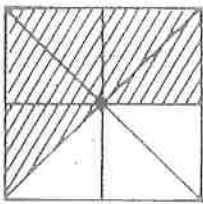
$$\frac{3}{8}$$



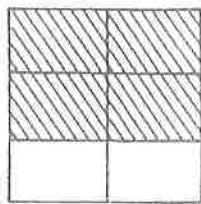
$$\frac{2}{3}$$



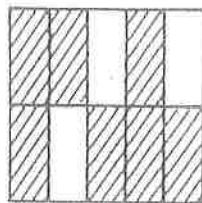
$$\frac{3}{4}$$



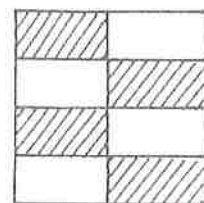
$$\frac{5}{8}$$



$$\frac{4}{6} \text{ ou } \frac{2}{3}$$



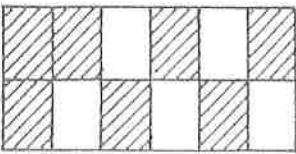
$$\frac{7}{10}$$



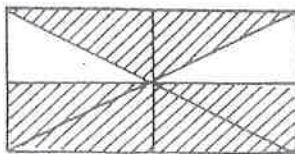
$$\frac{4}{8} \text{ ou } \frac{1}{2}$$



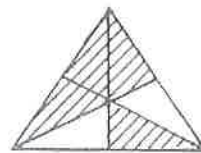
$$\frac{3}{4}$$



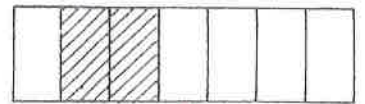
$$\frac{7}{12}$$



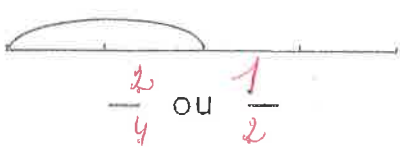
$$\frac{6}{8} \text{ ou } \frac{3}{4}$$




$$\frac{4}{6} \text{ ou } \frac{2}{3}$$




$$\frac{2}{7}$$



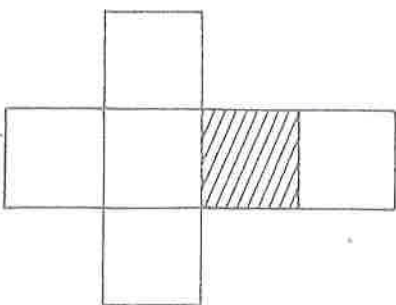
$$\frac{2}{4} \text{ ou } \frac{1}{2}$$



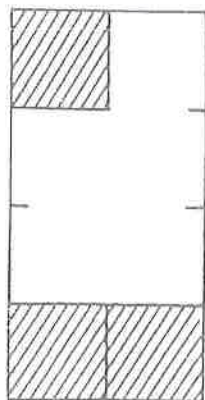
$$\frac{3}{5}$$



$$\frac{5}{8}$$



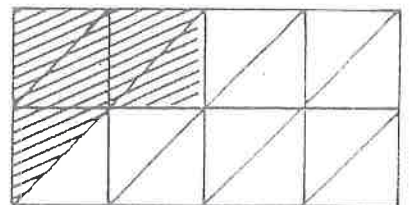
$$\frac{1}{6}$$



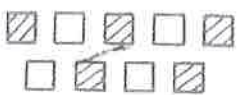
$$\frac{3}{8}$$



$$\frac{1}{4} \text{ ou } \frac{4}{4}$$



$$\frac{5}{16}$$



$$\frac{5}{10}$$



$$\frac{3}{10}$$



$$\frac{9}{11}$$